

Practice Test for MHT-CET_1

SECTION-A

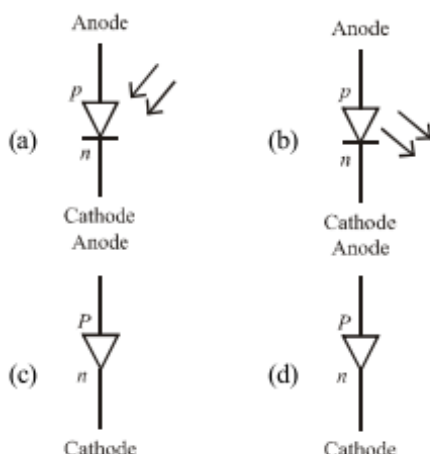
PHYSICS

- In potentiometer experiment, null point is obtained at a particular point for a cell on potentiometer wire x cm long. If the length of the potentiometer wire is increased without changing the cell, the balancing length will (Driving source is not changed)
(a) increase (b) decrease
(c) not change (d) become zero
- An iron rod is placed parallel to magnetic field of intensity 2000 Am^{-1} . The magnetic flux through the rod is $6 \times 10^{-4} \text{ Wb}$ and its cross-sectional area is 3 cm^2 . The magnetic permeability of the rod in $\text{Wb A}^{-1}\text{m}^{-1}$ is
(a) 10^{-1} (b) 10^{-2} (c) 10^{-3} (d) 10^{-4}
- Alternating current of peak value $\left(\frac{2}{\pi}\right)$ ampere flows through the primary coil of the transformer. The coefficient of mutual inductance between primary and secondary coil is 1 H . The peak emf induced in secondary coil is (Frequency of AC = 50 Hz)
(a) 100 V (b) 200 V (c) 300 V (d) 400 V
- An electron of mass m has de-Broglie wavelength λ when accelerated through potential difference V . When proton of mass M , is accelerated through potential difference 9 V , the de-Broglie wavelength associated with it will be (Assume that wavelength is determined at low voltage)
(a) $\frac{\lambda}{3\sqrt{M}}$ (b) $\frac{\lambda}{3} \frac{M}{m}$ (c) $\frac{\lambda}{3} \sqrt{\frac{m}{M}}$ (d) $\frac{\lambda}{3} \frac{m}{M}$
- Interference fringes are produced on a screen by using two light sources of intensities I and $9I$. The phase difference between the beams is $\frac{\pi}{2}$ at point P and π at point Q on the screen. The difference between the resultant intensities at point P and Q is
(a) $2I$ (b) $4I$ (c) $6I$ (d) $8I$
- From Brewster's law, except for polished metallic surfaces, the polarising angle
(a) depends on wavelength and is different for different colours
(b) independent of wavelength and is different for different colours
(c) independent of wavelength and is same for different colours
(d) depends on wavelength and is same for different colours
- Two particles X and Y having equal charges after being accelerated through same potential difference enter a region of uniform magnetic field and describe a circular paths of radii r_1 and r_2 respectively. The ratio of the mass of X to that of Y is
(a) $\frac{r_1}{r_2}$ (b) $\sqrt{\frac{r_1}{r_2}}$ (c) $\left[\frac{r_2}{r_1}\right]^2$ (d) $\left[\frac{r_1}{r_2}\right]^2$

8. When an electron in hydrogen atom revolves in stationary orbit, it
 (a) does not radiate light though its velocity changes
 (b) does not radiate light and velocity remains unchanged
 (c) radiates light but its velocity is unchanged
 (d) radiates light with the change of energy
9. The magnetic field (B) inside a long, solenoid having n turns per unit length and carrying current/when iron core is kept in it is ($\mu_0 =$ permeability of vacuum, $\chi =$ magnetic susceptibility)
 (a) $\mu_0 n I (1 - \chi)$ (b) $\mu_0 n I \chi$
 (c) $\mu_0 n I^2 (1 + \chi)$ (d) $\mu_0 n I (1 + \chi)$
10. In balanced meter bridge, the resistance of bridge wire is 0.1Ω cm. Unknown resistance X is connected in left gap and 6Ω in right gap, null point divides the wire in the ratio 2:3. Find the current drawn from the battery of 5 V having negligible resistance
 (a) 1 A (b) 1.5 A (c) 2 A (d) 5 A
11. Three parallel plate air capacitors are connected in parallel. Each capacitor has plate area $\frac{A}{3}$ and the separation between the plates is d , $2d$ and $3d$ respectively. The equivalent capacity of combination is ($\epsilon_0 =$ absolute permittivity of free space)
 (a) $\frac{7\epsilon_0 A}{18d}$ (b) $\frac{11\epsilon_0 A}{18d}$ (c) $\frac{13\epsilon_0 A}{18d}$ (d) $\frac{17\epsilon_0 A}{18d}$
12. In an oscillator, for sustained oscillations, Barkhausen criterion is $A\beta$ equal to ($A =$ voltage gain without feedback and $\beta =$ feedback factor)
 (a) zero (b) $\frac{1}{2}$ (c) 1 (d) 2
13. Light of wavelength λ which is less than threshold wavelength is incident on a photosensitive material. If incident wavelength is decreased so that emitted photoelectrons are moving with same velocity, then stopping potential will
 (a) increase (b) decrease
 (c) be zero (d) become exactly half
14. A ray of light travelling through rarer medium is incident at very small angle i on a glass slab and after refraction its velocity is reduced by 20%. The angle of deviation is
 (a) $\frac{i}{8}$ (b) $\frac{i}{5}$ (c) $\frac{i}{2}$ (d) $\frac{4i}{5}$
15. The maximum frequency of transmitted radio waves above which the radio waves are no longer reflected back by ionosphere is ($N =$ maximum electron density of Ionosphere, $g =$ acceleration due to gravity)
 (a) gN (b) gN^2 (c) $g\sqrt{N}$ (d) g^2N^2
16. Wire having tension 225 N produces six beats per second when it is tuned with a fork. When tension changes to 256 N, it is tuned with the same fork, the number of beats remain unchanged. The frequency of the fork will be
 (a) 186 Hz (b) 225 Hz (c) 256 Hz (d) 280 Hz
17. Assuming the expression for the pressure exerted by the gas on the walls of the container, it can be shown that pressure is
 (a) $\left[\frac{1}{3}\right]^m$ kinetic energy per unit volume of a gas
 (b) $\left[\frac{2}{3}\right]^m$ kinetic energy per unit volume of a gas
 (c) $\left[\frac{3}{4}\right]^m$ kinetic energy per unit volume of a gas
 (d) $\frac{3}{2} \times$ kinetic energy per unit volume of a gas
18. A mass m_1 connected to a horizontal spring performs SHM with amplitude A . While mass m_1 is passing through mean position, another mass m_2 is placed on it so that both the masses move together with amplitude A_1 . The ratio of $\frac{A_1}{A}$ is ($m_2 < m_1$)
 (a) $\left[\frac{m_1}{m_1 + m_2}\right]^{\frac{1}{2}}$ (b) $\left[\frac{m_1 + m_2}{m_1}\right]^{\frac{1}{2}}$
 (c) $\left[\frac{m_2}{m_1 + m_2}\right]^{\frac{1}{2}}$ (d) $\left[\frac{m_1 + m_2}{m_2}\right]^{\frac{1}{2}}$
19. A particle moves along a circle of radius r with constant tangential acceleration. If the velocity of the particle is v at the end of second revolution, after the revolution has started, then the tangential acceleration is
 (a) $\frac{v^2}{8\pi r}$ (b) $\frac{v^2}{6\pi r}$ (c) $\frac{v^2}{2\pi r}$ (d) $\frac{v^2}{2\pi r}$
20. Two strings A and B of same material are stretched by same tension. The radius of the string A is double the radius of string B . Transverse wave travels on string A with speed v_A and on string B with speed v_B . The ratio $\frac{v_A}{v_B}$ is
 (a) $\frac{1}{4}$ (b) $\frac{1}{2}$ (c) 2 (d) 4

21. Which of the following quantity does not change due to damping of oscillations?
 (a) Angular frequency (b) Time period
 (c) Initial phase (d) Amplitude
22. If the end correction of an open pipe is 0.8 cm, then the inner radius of that pipe will be
 (a) $\frac{1}{3}$ cm (b) $\frac{2}{3}$ cm (c) $\frac{3}{2}$ cm (d) 0.2 cm
23. A progressive wave is represented by $y = 12 \sin(5t - 4x)$ cm. On this wave, how far away are the two points having phase difference of 90° ?
 (a) $\frac{\pi}{2}$ cm (b) $\frac{\pi}{4}$ cm (c) $\frac{\pi}{8}$ (d) $\frac{\pi}{16}$
24. Two particles of masses m and $9m$ are separated by a distance r . At a point on the line joining them the gravitational field is zero. The gravitational potential at that point is (G = universal constant of gravitation)
 (a) $-\frac{4Gm}{r}$ (b) $-\frac{8Gm}{r}$
 (c) $-\frac{16Gm}{r}$ (d) $-\frac{32Gm}{r}$
25. A black rectangular surface of area A emits energy E per second at 27°C . If length and breadth are reduced to $\frac{1}{3}$ of initial value and temperature is raised to 327°C , then energy emitted per second becomes
 (a) $\frac{4E}{9}$ (b) $\frac{7E}{9}$ (c) $\frac{10E}{9}$ (d) $\frac{16E}{9}$
26. For a gas $\frac{R}{C_V} = 0.4$, where R is the universal gas constant and C_V is molar specific heat at constant volume. The gas is made up of molecules which are
 (a) rigid diatomic (b) monoatomic
 (c) non-rigid diatomic (d) polyatomic
27. In vertical circular motion, the ratio of kinetic energy of a particle at highest point to that at lowest point is
 (a) 5 (b) 2 (c) 0.5 (d) 0.2
28. Two wires having same length and material are stretched by same force. Their diameters are in the ratio 1:3. The ratio of strain energy per unit volume for these two wires (smaller to larger diameter) when stretched is
 (a) 3:1 (b) 9:1 (c) 27:1 (d) 81:1
29. A ring and a disc roll on the horizontal surface without slipping, with same linear velocity. If both have same mass and total kinetic energy of the ring is 4 J, then total kinetic energy of the disc is
 (a) 3 J (b) 4 J (c) 5 J (d) 6 J
30. When the observer moves towards the stationary source with velocity, v_1 the apparent frequency of emitted note is f_1 . When the observer moves away from the source with velocity v_1 , the apparent frequency is f_2 . If v is the velocity of sound in air and $\frac{f_1}{f_2} = 2$, then $\frac{v}{v_1} = ?$
 (a) 2 (b) 3 (c) 4 (d) 5
31. A liquid drop having surface energy E is spread into 512 droplets of same size. The final surface energy of the droplets is
 (a) 2E (b) 4E (c) 8E (d) 12E
32. Let M be the mass and L be the length of a thin uniform rod. In first case, axis of rotation is passing through centre and perpendicular to the length of the rod. In second case, axis of rotation is passing through one end and perpendicular to the length of the rod. The ratio of radius of gyration in first case to second case is
 (a) 1 (b) $\frac{1}{2}$ (c) $\frac{1}{4}$ (d) $\frac{1}{8}$
33. A simple pendulum of length l has maximum angular displacement θ . The maximum kinetic energy of the bob of mass m is (g = acceleration due to gravity)
 (a) $mg l (1 + \cos \theta)$ (b) $mg l (1 + \cos^2 \theta)$
 (c) $mg l (1 - \cos \theta)$ (d) $mg l (\cos \theta - 1)$
34. Angular speed of hour hand of a clock in degree per second is
 (a) $\frac{1}{30}$ (b) $\frac{1}{60}$ (c) $\frac{1}{120}$ (d) $\frac{1}{720}$
35. The value of gravitational acceleration g at a height h above the earth's surface is $\frac{g}{4}$, then (R = radius of earth)
 (a) $h = R$ (b) $h = \frac{R}{2}$
 (c) $h = \frac{R}{3}$ (d) $h = \frac{R}{4}$

36. The schematic symbol of light emitting diode (LED) is



37. The amount of work done in increasing the voltage across the plates of capacitor from 5 V to 10 V is W . The work done in increasing it from 10 V to 15 V will be
 (a) W (b) $0.6W$ (c) $1.25W$ (d) $1.67W$
38. Magnetic flux passing through a coil is initially 4×10^{-4} Wb. It reduces to 10% of its original value in t second. If the emf induced is 0.72 mV then t in second is
 (a) 0.3 (b) 0.4 (c) 0.5 (d) 0.6
39. Resolving power of telescope increases when
 (a) wavelength of light decreases
 (b) wavelength of light increases
 (c) focal length of eye-piece increases
 (d) focal length of eye-piece decreases
40. When light of wavelength λ is incident on photosensitive surface, the stopping potential is V . When light of wavelength 3λ is incident on same surface, the stopping potential is $\frac{V}{6}$.
 Threshold wavelength for the surface is
 (a) 2λ (b) 3λ (c) 4λ (d) 5λ
41. The bob of a simple pendulum performs SHM with period T in air and with period T_1 in water. Relation between T and T_1 is (neglect friction due to water, density of the material of the bob is $\frac{9}{8} \times 10^3 \text{ kgm}^{-3}$, density of water = 1 gcc^{-1})
 (a) $T_1 = 3T$ (b) $T_1 = 2T$
 (c) $T_1 = T$ (d) $T_1 = \frac{T}{2}$
42. In a capillary tube of radius R , a straight thin metal wire of radius r ($R > r$) is inserted symmetrically

and one end of the combination is dipped vertically in water such that the lower end of the combination is at same level. The rise of water in the capillary tube is

[T = surface tension of water, ρ = density of water and g = gravitational acceleration]

- (a) $\frac{T}{(R+r)\rho g}$ (b) $\frac{R\rho g}{2T}$
 (c) $\frac{2T}{(R-r)\rho g}$ (d) $\frac{(R-r)\rho g}{T}$

43. When open pipe is closed from one end, then third overtone of closed pipe is higher in frequency by 150 Hz than second overtone of open pipe. The fundamental frequency of open end pipe will be
 (a) 75 Hz (b) 150 Hz
 (c) 225 Hz (d) 300 Hz
44. A disc of radius R and thickness $\frac{R}{6}$ has moment of inertia/about an axis passing through its centre and perpendicular to its plane. Disc is melted and recast into a solid sphere. The moment of inertia of a sphere about its diameter is
 (a) $\frac{l}{5}$ (b) $\frac{l}{6}$ (c) $\frac{l}{32}$ (d) $\frac{l}{64}$
45. Let a steel bar of length l , breadth b and depth d be loaded at the centre by a load W . Then the sag of bending of beam is (Y = Young's modulus of material of steel)
 (a) $\frac{Wl^3}{2bd^3Y}$ (b) $\frac{Wl^3}{4bd^3Y}$
 (c) $\frac{Wl^2}{2bd^3Y}$ (d) $\frac{Wl^3}{4bd^2Y}$
46. In Bohr's theory of hydrogen atom, the electron jumps from higher orbit n to lower orbit p . The wavelength will be minimum for the transition
 (a) $n = 5$ to $p = 4$ (b) $n = 4$ to $p = 3$
 (c) $n = 3$ to $p = 2$ (d) $n = 2$ to $p = 1$
47. Two identical parallel plate air capacitors are connected in series to a battery of emf V . If one of the capacitor is completely filled with dielectric material of constant K , then potential difference of the other capacitor will become
 (a) $\frac{K}{V(K+1)}$ (b) $\frac{KV}{K+1}$
 (c) $\frac{K-1}{KV}$ (d) $\frac{V}{K(K+1)}$

48. The L - C parallel resonant circuit
 (a) has a very high impedance
 (b) has a very high current
 (c) acts as resistance of very low value
 (d) has zero impedance
49. A galvanometer of resistance $30\ \Omega$ is connected to a battery of emf $2\ \text{V}$ with $1970\ \Omega$ resistance in series. A full scale deflection of 20 divisions is obtained in the galvanometer. To reduce the deflection to 10 divisions, the resistance in series required is
 (a) $4030\ \Omega$ (b) $4000\ \Omega$
 (c) $3970\ \Omega$ (d) $2000\ \Omega$
50. Two coherent sources P and Q produce interference at point A on the screen where there is a dark band which is formed between 4th bright band and 5th bright band. Wavelength of light used is $6000\ \text{\AA}$. The path difference between PA and QA is
 (a) $1.4 \times 10^{-4}\ \text{cm}$ (b) $2.7 \times 10^{-4}\ \text{cm}$
 (c) $4.5 \times 10^{-4}\ \text{cm}$ (d) $6.2 \times 10^{-4}\ \text{cm}$

CHEMISTRY

51. If ' n ' represents total number of asymmetric carbon atoms in a compound, then the possible number of optical isomers of the compound is
 (a) $2n$ (b) n^2 (c) 2^n (d) $2n+2$
52. The equation that represents general van't Hoff equation is
 (a) $\pi = \frac{n}{V}RT$ (b) $\pi = nRT$
 (c) $\pi = \frac{V}{n}RT$ (d) $\pi = nVRT$
53. Which is the most stable allotrope of sulphur?
 (a) Octahedral sulphur
 (b) Monoclinic sulphur
 (c) Plastic sulphur
 (d) Colloidal sulphur
54. Select the correct statement for thermoplastic polymer.
 (a) It does not become soft on heating under pressure
 (b) It cannot be remoulded
 (c) It is either linear or branched chain polymer
 (d) It is a cross-linked polymer
55. How many Faradays of electricity are required to deposit $10\ \text{g}$ of calcium from molten calcium chloride using inert electrodes?
 (Molar mass of calcium = $40\ \text{g mol}^{-1}$)
 (a) $0.5\ \text{F}$ (b) $1\ \text{F}$ (c) $0.25\ \text{F}$ (d) $2\ \text{F}$
56. Name the reagent that is used in leaching of gold.
 (a) Carbon (b) Sodium cyanide
 (c) Carbon monoxide (d) Iodine
57. Which of the following is an analgesic?
 (a) Ofloxacin (b) Penicillin
 (c) Aminoglycosides (d) Paracetamol
58. The compound which is not formed when a mixture of n -butyl bromide and ethyl bromide treated with sodium metal in the presence of dry ether is
 (a) butane (b) octane
 (c) hexane (d) ethane
59. What is the general molecular formula of the products obtained on heating lanthanoids (Ln) with sulphur?
 (a) LnS (b) LnS_3 (c) Ln_3S_2 (d) Ln_2S_3
60. Butylated hydroxy anisole is a/an
 (a) antioxidant (b) cleansing agent
 (c) disinfectant (d) antihistamine
61. In the cell represented by $\text{Pb}(s) | \text{Pb}^{2+}(1\text{M}) || \text{Ag}^+(1\text{M}) | \text{Ag}(s)$, the reducing agent is
 (a) Pb (b) Pb^{2+} (c) Ag (d) Ag^+
62. Which metal crystallises in a simple cubic structure?
 (a) Polonium (b) Copper
 (c) Nickel (d) Iron
63. The amine 'A' when treated with nitrous acid gives yellow oily substance. The amine A is
 (a) triethylamine
 (b) trimethylamine
 (c) aniline
 (d) methylphenylamine
64. The element that does not form acidic oxide is
 (a) carbon (b) phosphorus
 (c) chlorine (d) barium
65. While assigning R, S configuration, the correct order of priority of groups attached to chiral carbon atom is
 (a) $\text{CONH}_2 > \text{COCH}_3 > \text{CH}_2\text{OH} > \text{CHO}$
 (b) $\text{CONH}_2 > \text{COCH}_3 > \text{CHO} > \text{CH}_2\text{OH}$
 (c) $\text{COCH}_3 > \text{CONH}_2 > \text{CHO} > \text{CH}_2\text{OH}$
 (d) $\text{CHO} > \text{CH}_2\text{OH} > \text{COCH}_3 > \text{CONH}_2$
66. Bulletproof helmets are made from
 (a) lexan (b) saran
 (c) glyptal (d) thiokol
67. Which metal is refined by Mond's process?
 (a) Titanium (b) Copper
 (c) Nickel (d) Zinc
68. Isopropyl methyl ether when treated with cold hydrogen iodide gives
 (a) isopropyl iodide and methyl iodide
 (b) isopropyl alcohol and methyl iodide
 (c) isopropyl alcohol and methyl alcohol
 (d) isopropyl iodide and methyl alcohol

69. In face centred cubic unit cell, what is the volume occupied?
- (a) $\frac{4}{3}\pi r^3$ (b) $\frac{8}{3}\pi r^3$
(c) $\frac{16}{3}\pi r^3$ (d) $\frac{64r^3}{3\sqrt{3}}$
70. Glucose on oxidation with bromine water yields gluconic acid. This reaction confirms the presence of
- (a) six carbon atoms linked in straight chain
(b) secondary alcoholic group in glucose
(c) aldehyde group in glucose
(d) primary alcoholic group in glucose
71. How is sodium chromate converted into sodium dichromate in the manufacture of potassium dichromate from chromite ore?
- (a) By the action of concentrated sulphuric acid
(b) By roasting with soda ash
(c) By the action of sodium hydroxide
(d) By the action of limestone
72. In dry cell, what acts as a negative electrode?
- (a) Zinc (b) Graphite
(c) Ammonium chloride (d) Manganese dioxide
73. Select the compound which on treatment with nitrous acid liberates nitrogen.
- (a) Nitroethane (b) Triethylamine
(c) Diethylamine (d) Ethylamine
74. 5.0 g of sodium hydroxide (molar mass 40 g mol⁻¹) is dissolved in little quantity of water and the solution is diluted upto 100 mL. What is the molarity of the resulting solution?
- (a) 0.1 mol dm⁻³ (b) 1.0 mol dm⁻³
(c) 0.125 mol dm⁻³ (d) 1.25 mol dm⁻³
75. Which of the following compound when treated with dibenzyl cadmium yields benzyl methyl ketone?
- (a) Acetone (b) Acetaldehyde
(c) Acetic acid (d) Acetyl chloride
76. Which halide of magnesium has highest ionic character?
- (a) Chloride (b) Bromide
(c) Iodide (d) Fluoride
77. The reaction takes place in two steps as
- (i) $\text{NO}_2\text{Cl}(\text{g}) \xrightarrow{k_1} \text{NO}_2(\text{g}) + \text{Cl}(\text{g})$,
(ii) $\text{NO}_2\text{Cl}(\text{g}) + \text{Cl}(\text{g}) \xrightarrow{k_2} \text{NO}_2(\text{g}) + \text{Cl}_2(\text{g})$
Identify the reaction intermediate.
- (a) $\text{NO}_2\text{Cl}(\text{g})$ (b) $\text{NO}_2(\text{g})$
(c) $\text{Cl}_2(\text{g})$ (d) $\text{Cl}(\text{g})$
78. Which of the following amino acid is basic in nature?
- (a) Valine (b) Tyrosine
(c) Arginine (d) Leucine
79. The relation between solubility of a gas in liquid at constant temperature and external pressure is stated by which law?
- (a) Raoult's law
(b) van't Hoff-Boyle's law
(c) van't Hoff-Charles' law
(d) Henry's law
80. Which among the following phenolic compound is most acidic in nature?
- (a) *p*-aminophenol (b) Phenol
(c) *m*-nitrophenol (d) *p*-nitrophenol
81. Which among the following solid is a non-polar solid?
- (a) Hydrogen chloride
(b) Sulphur dioxide
(c) Water
(d) Carbon dioxide
82. Identify the metal that forms colourless compounds.
- (a) Iron (Z=26) (b) Chromium (Z=24)
(c) Vanadium (Z=23) (d) Scandium (Z=21)
83. What is the highest oxidation state exhibited by group 17 elements?
- (a) +1 (b) +3 (c) +5 (d) +7
84. Mathematical equation of first law of thermodynamics for isochoric process is
- (a) $\Delta U = q_v$ (b) $\Delta U = q_p$
(c) $q = -W$ (d) $\Delta U = W$
85. Name the catalyst used in commercial method of preparation of phenol.
- (a) Silica
(b) Calcium phosphate
(c) Anhydrous aluminium chloride
(d) Cobalt naphthenate
86. The rate constant and half-life of a first order reaction are related to each other as
- (a) $t_{1/2} = \frac{0.693}{k}$ (b) $t_{1/2} = 0.693k$
(c) $k = 0.693t_{1/2}$ (d) $kt_{1/2} = \frac{1}{0.693}$
87. What is the combining ratio of glycerol and fatty acid when they combine to form triglyceride?
- (a) 3:4 (b) 3:2 (c) 1:3 (d) 1:2
88. The molecular formula of Wilkinson's catalyst used in the hydrogenation of alkenes is
- (a) $\text{Co}(\text{CO})_8$ (b) $(\text{Ph}_3\text{P})_3\text{RhCl}$
(c) $[\text{Pt}(\text{NH}_3)_2\text{Cl}_2]$ (d) $\text{K}[\text{Ag}(\text{CN})_2]$
89. The criterion for a spontaneous process is
- (a) $\Delta G > 0$ (b) $\Delta G < 0$
(c) $\Delta G = 0$ (d) $\Delta S_{\text{total}} < 0$
90. Brown ring test is used for detection of which radical?
- (a) Ferrous (b) Nitrite
(c) Nitrate (d) Ferric

91. The reagent used in Wolff-Kishner reduction is
 (a) $\text{NH}_2 - \text{NH}_2$ and KOH in ethylene glycol
 (b) $\text{Zn} - \text{Hg}$ / conc. HCl
 (c) NaBH_4
 (d) $\text{Na} - \text{Hg}/\text{H}_2\text{O}$
92. Which of the following is a neutral complex?
 (a) $[\text{Pt}(\text{NH}_3)_2\text{Cl}_2]$ (b) $[\text{Co}(\text{NH}_3)_6]\text{Cl}_3$
 (c) $[\text{Ni}(\text{NH}_3)_6]\text{Cl}_2$ (d) $\text{K}_4[\text{Fe}(\text{CN})_6]$
93. Identify the compound amongst the following of which 0.1 M aqueous solution has highest boiling point.
 (a) Glucose (b) Sodium chloride
 (c) Calcium chloride (d) Ferric chloride
94. Which reagent is used in Etard reaction?
 (a) Chromyl chloride (b) Ethanoyl chloride
 (c) SnCl_2 and HCl (d) Cadmium chloride
95. The most abundant noble gas in atmosphere is
 (a) neon (b) argon
 (c) xenon (d) krypton
96. Identify an extensive property amongst the following.
 (a) Viscosity (b) Heat capacity
 (c) Density (d) Surface tension
97. Which of the following carboxylic acids is a tricarboxylic acid?
 (a) Oxalic acid (b) Citric acid
 (c) Succinic acid (d) Adipic acid
98. Average rate of reaction for the following reaction.
 $2\text{SO}_2(g) + \text{O}_2(g) \rightarrow 2\text{SO}_3(g)$ is written as
 (a) $\frac{\Delta[\text{SO}_2]}{\Delta t}$ (b) $-\frac{\Delta[\text{O}_2]}{\Delta t}$
 (c) $\frac{1}{2} \frac{\Delta[\text{SO}_2]}{\Delta t}$ (d) $\frac{\Delta[\text{SO}_3]}{\Delta t}$
99. What is the amount of work done when 0.5 mole of methane, $\text{CH}_4(g)$, is subjected to combustion at 300 K? (Given, $R = 8.314 \text{ JK}^{-1} \text{ mol}^{-1}$)
 (a) -2494 J (b) -4988 J
 (c) $+4988 \text{ J}$ (d) $+2494 \text{ J}$
100. Primary nitroalkanes are obtained in good yield by oxidising aldoximes with the help of
 (a) trifluoroperoxy acetic acid
 (b) acidified potassium permanganate
 (c) concentrated nitric acid
 (d) potassium dichromate and dilute sulphuric acid

SECTION-B

MATHEMATICS

1. Let $X \sim B(n, p)$, if $E(X) = 5$, $\text{Var}(X) = 2.5$, then $p(X < 1)$ is equal to
 (a) $\left(\frac{1}{2}\right)^{11}$ (b) $\left(\frac{1}{2}\right)^{10}$ (c) $\left(\frac{1}{2}\right)^6$ (d) $\left(\frac{1}{2}\right)^9$
2. Derivative of $\tan^{-1}\left(\frac{x}{\sqrt{1-x^2}}\right)$ with respect to $\sin^{-1}(3x - 4x^3)$ is
 (a) $\frac{1}{\sqrt{1-x^2}}$ (b) $\frac{3}{\sqrt{1-x^2}}$
 (c) 3 (d) $\frac{1}{3}$
3. The differential equation of the family of circles touching Y -axis at the origin is
 (a) $(x^2 + y^2) \frac{dy}{dx} - 2xy = 0$
 (b) $(x^2 - y^2) + 2xy \frac{dy}{dx} = 0$
 (c) $(x^2 - y^2) \frac{dy}{dx} - 2xy = 0$
 (d) $(x^2 + y^2) \frac{dy}{dx} + 2xy = 0$
4. If $A = \begin{bmatrix} 1 & 1 & 0 \\ 2 & 1 & 5 \\ 1 & 2 & 1 \end{bmatrix}$, then $a_{11}A_{21} + a_{12}A_{22} + a_{13}A_{23}$ is equal to
 (a) 1 (b) 0 (c) -1 (d) 2
5. If Rolle's theorem for $f(x) = e^x(\sin x - \cos x)$ is verified on $\left[\frac{\pi}{4}, \frac{5\pi}{4}\right]$, then the value of c is
 (a) $\frac{\pi}{3}$ (b) $\frac{\pi}{2}$ (c) $\frac{3\pi}{3}$ (d) π
6. The joint equation of lines passing through the origin and trisecting the first quadrant is
 (a) $x^2 + \sqrt{3}xy - y^2 = 0$
 (b) $x^2 - \sqrt{3}xy - y^2 = 0$
 (c) $\sqrt{3}x^2 - 4xy + \sqrt{3}y^2 = 0$
 (d) $3x^2 - y^2 = 0$

7. If $2 \tan^{-1}(\cos x) = \tan^{-1}(2 \operatorname{cosec} x)$, then $\sin x + \cos x$ is equal to
 (a) $2\sqrt{2}$ (b) $\sqrt{2}$ (c) $\frac{1}{\sqrt{2}}$ (d) $\frac{1}{2}$
8. Direction cosines of the line $\frac{x+2}{2} = \frac{2y-5}{3}$, $z = -1$ are
 (a) $\frac{4}{5}, \frac{3}{5}, 0$ (b) $\frac{3}{5}, \frac{4}{5}, \frac{1}{5}$
 (c) $-\frac{3}{5}, \frac{4}{5}, 0$ (d) $\frac{4}{5}, -\frac{2}{5}, \frac{1}{5}$
9. $\int \frac{1}{\sqrt{8+2x-x^2}} dx$ is equal to
 (a) $\frac{1}{3} \sin^{-1}\left(\frac{x-1}{3}\right) + c$ (b) $\sin^{-1}\left(\frac{x+1}{3}\right) + c$
 (c) $\frac{1}{3} \sin^{-1}\left(\frac{x+1}{3}\right) + c$ (d) $\sin^{-1}\left(\frac{x-1}{3}\right) + c$
10. The approximate value of $f(x) = x^3 + 5x^2 - 7x + 9$ at $x = 1.1$ is
 (a) 8.6 (b) 8.5 (c) 8.4 (d) 8.3
11. If random variable waiting time in minutes for bus and probability density function of x is given by

$$f(x) = \begin{cases} \frac{1}{5}, & 0 \leq x \leq 5 \\ 0, & \text{otherwise,} \end{cases}$$
 then probability of waiting time not more than 4 minutes is equal to
 (a) 0.3 (b) 0.8 (c) 0.2 (d) 0.5
12. In ΔABC , $(a-b)^2 \cos^2 \frac{C}{2} + (a+b)^2 \sin^2 \frac{C}{2}$ is equal to
 (a) b^2 (b) c^2
 (c) a^2 (d) $a^2 + b^2 + c^2$
13. Derivative of $\log(\sec \theta + \tan \theta)$ with respect to $\sec \theta$ at $\theta = \frac{\pi}{4}$ is
 (a) 0 (b) 1 (c) $\frac{1}{\sqrt{2}}$ (d) $\sqrt{2}$
14. The joint equation of bisectors of angles between lines $x = 5$ and $y = 3$ is
 (a) $(x-5)(y-3) = 0$
 (b) $x^2 - y^2 - 10x + 6y + 16 = 0$
 (c) $xy = 0$
 (d) $xy - 5x - 3y + 15 = 0$
15. The point on the curve $6y = x^3 + 2$ at which y -coordinate is changing 8 times as fast as x -coordinate is
 (a) (4,11) (b) (4,-11)
 (c) (-4, 11) (d) (-4, -11)
16. If the function $f(x)$ defined by

$$f(x) = \begin{cases} x \sin \frac{1}{x}, & \text{for } x \neq 0 \\ k, & \text{for } x = 0 \end{cases}$$
 is continuous at $x = 0$, then k is equal to
 (a) 0 (b) 1 (c) -1 (d) $\frac{1}{2}$
17. If $y = e^m \sin^{-1} x$ and $(1-x^2) = Ay^2$, then A is equal to
 (a) m (b) $-m$ (c) m^2 (d) $-m^2$
18. $\int \left(\frac{4e^x - 25}{2e^x - 5} \right) dx = Ax + B \log(2e^x - 5) + c$, then
 (a) $A = 5$ and $B = 3$ (b) $A = 5$ and $B = -3$
 (c) $A = -5$ and $B = 3$ (d) $A = -5$ and $B = -3$
19. $\frac{\tan^{-1}(\sqrt{3}) - \sec^{-1}(-2)}{\operatorname{cosec}^{-1}(-\sqrt{2}) + \cos^{-1}\left(-\frac{1}{2}\right)}$ is equal to
 (a) $\frac{4}{5}$ (b) $-\frac{4}{5}$ (c) $\frac{3}{5}$ (d) 0
20. For what value of k , the function defined by $f(x) = \frac{\log(1+2x) \sin x^0}{x^2}$, for $x \neq 0$
 k , for $x = 0$
 is continuous at $x = 0$?
 (a) 2 (b) $\frac{1}{2}$ (c) $\frac{\pi}{90}$ (d) $\frac{90}{\pi}$
21. If $\log_{10} \left(\frac{x^2 - y^2}{x^2 + y^2} \right) = 2$, then $\frac{dy}{dx}$ is equal to
 (a) $-\frac{99x}{101y}$ (b) $\frac{99x}{101y}$
 (c) $-\frac{99y}{101x}$ (d) $\frac{99y}{101x}$
22. $\int_{-\pi/2}^{\pi/2} \log \left(\frac{2 - \sin x}{2 + \sin x} \right) dx$ is equal to
 (a) 1 (b) 3 (c) 2 (d) 0

23. $\int \left(\frac{(x^2+2)a^{(x+\tan^{-1}x)}}{x^2+1} \right) dx$ is equal to

- (a) $\log(a)a^{x+\tan^{-1}x} + c$ (b) $\frac{(x+\tan^{-1}x)}{\log a} + c$
 (c) $\frac{a^{x+\tan^{-1}x}}{\log a} + c$ (d) $\log a(x+\tan^{-1}x) + c$

24. The degree and order of the differential equation

$$\left[1 + \left(\frac{dy}{dx} \right)^3 \right]^{\frac{7}{3}} = 7 \left(\frac{d^2y}{dx^2} \right)$$
 respectively are

- (a) 3 and 7 (b) 3 and 2
 (c) 7 and 3 (d) 2 and 3

25. The acute angle between the line

$$\vec{r} = (\hat{i} + 2\hat{j} + \hat{k}) + \lambda(\hat{i} + \hat{j} + \hat{k})$$
 and the plane

$$\vec{r} \times (2\hat{i} - \hat{j} + \hat{k}) = 5$$

- (a) $\cos^{-1}\left(\frac{\sqrt{2}}{3}\right)$ (b) $\sin^{-1}\left(\frac{\sqrt{2}}{3}\right)$
 (c) $\tan^{-1}\left(\frac{\sqrt{2}}{3}\right)$ (d) $\sin^{-1}\left(\frac{\sqrt{2}}{\sqrt{3}}\right)$

26. The area of the region bounded by the curve $y = 2x - x^2$ and X -axis is

- (a) $\frac{2}{3}$ sq units (b) $\frac{4}{3}$ sq units
 (c) $\frac{5}{3}$ sq units (d) $\frac{8}{3}$ sq units

27. If $\int \frac{f(x)}{\log(\sin x)} dx = \log[\log \sin x] + c$, then $f(x)$

is equal to

- (a) $\cot x$ (b) $\tan x$
 (c) $\sec x$ (d) $\operatorname{cosec} x$

28. If A and B are foot of perpendicular drawn from point $Q(a, b, c)$ to the planes yz and zx , then equation of plane through the points A, B and O is

- (a) $\frac{x}{a} + \frac{y}{b} - \frac{z}{c} = 0$ (b) $\frac{x}{a} - \frac{y}{b} + \frac{z}{c} = 0$
 (c) $\frac{x}{a} - \frac{y}{b} - \frac{z}{c} = 0$ (d) $\frac{x}{a} + \frac{y}{b} + \frac{z}{c} = 0$

29. If $a = \hat{a} = \hat{i} + \hat{j} - 2\hat{k}, \vec{b} = 2\hat{i} - \hat{j} + \hat{k}$ and $\vec{c} = 3\hat{i} - \hat{k}$ and $\vec{c} = m\vec{a} + n\vec{b}$, then $m + n$ is equal to
 (a) 0 (b) 1 (c) 2 (d) -1

30. $\int_0^{\frac{\pi}{2}} \left(\frac{\sqrt{\sec x}}{\sqrt{\sec x} + \sqrt{\operatorname{cosec} x}} \right) dx$ is equal to

- (a) $\frac{\pi}{2}$ (b) $\frac{\pi}{3}$ (c) $\frac{\pi}{4}$ (d) $\frac{\pi}{6}$

31. If the probability density function of a random variable X is given as

x_i	-2	-1	0	1	2
$P(X = x_i)$	0.2	0.3	0.15	0.25	0.1

then $F(0)$ is equal to

- (a) $P(X < 0)$ (b) $P(X > 0)$
 (c) $1 - P(X > 0)$ (d) $1 - (X < 0)$

32. The particular solution of the differential

equation $y(1 + \log x) \frac{dx}{dy} - x \log x = 0$, when,

$x = e, y = e^2$ is

- (a) $y = ex \log x$ (b) $ey = x \log x$
 (c) $xy = e \log x$ (d) $y \log x = ex$

33. M and N are the mid-points of the diagonals AC and BD respectively of quadrilateral $ABCD$, then $AB + AD + CB + CD$ is equal to

- (a) $2MN$ (b) $2NM$ (c) $4MN$ (d) $4NM$

34. If $\sin x$ is the integrating factor (IF) of the linear

differential equation $\frac{dy}{dx} + Py = Q$ then P is

- (a) $\log \sin x$ (b) $\cos x$
 (c) $\tan x$ (d) $\cot x$

35. Which of the following equation does not represent a pair of lines?

- (a) $x^2 - x = 0$ (b) $xy - x = 0$
 (c) $y^2 - x + 1 = 0$ (d) $xy + x + y + 1 = 0$

36. Probability of guessing correctly atleast 7 out of 10 answers in a 'True' or 'False' test is equal to

- (a) $\frac{11}{64}$ (b) $\frac{11}{32}$ (c) $\frac{11}{16}$ (d) $\frac{27}{32}$

37. Principal solutions at the equation $\sin 2x + \cos 2x = 0$, where $\pi < x < 2\pi$ are

- (a) $\frac{7\pi}{9}, \frac{11\pi}{8}$ (b) $\frac{9\pi}{8}, \frac{13\pi}{8}$
 (c) $\frac{11\pi}{8}, \frac{15\pi}{8}$ (d) $\frac{15\pi}{8}, \frac{19\pi}{8}$

38. It line joining points A and B having position vectors $6a - 4b + 4c$ and $-4c$ respectively and the line joining the points C and D having position vectors $-a - 2b - 3c$ and $a + 2b - 5c$ intersect, then point of intersection is
 (a) B (b) C (c) D (d) A

39. If $A = \begin{bmatrix} 2 & 2 \\ -3 & 2 \end{bmatrix}$, $B = \begin{bmatrix} 0 & -1 \\ 1 & 0 \end{bmatrix}$, then $(B^{-1}A^{-1})^{-1}$ is equal to

- (a) $\begin{bmatrix} 2 & -2 \\ 2 & 3 \end{bmatrix}$ (b) $\begin{bmatrix} 2 & 2 \\ -2 & 3 \end{bmatrix}$
 (c) $\begin{bmatrix} 2 & -3 \\ 2 & 2 \end{bmatrix}$ (d) $\begin{bmatrix} 1 & -1 \\ -2 & 3 \end{bmatrix}$

40. If p : Every square is a rectangle. q : Every rhombus is a kite, then truth values of $p \rightarrow q$ and $p \leftrightarrow q$ are ___ and ___ respectively.

- (a) F, F (b) T, F (c) F, T (d) T, T
 41. If $G(g)$, $H(h)$ and (p) are centroid orthocentre and circumcentre of a triangle and $xp + yh + zg = 0$, then (x, y, z) is equal to
 (a) 1, 1, -2 (b) 2, 1, -3
 (c) 1, 3, -4 (d) 2, 3, -5

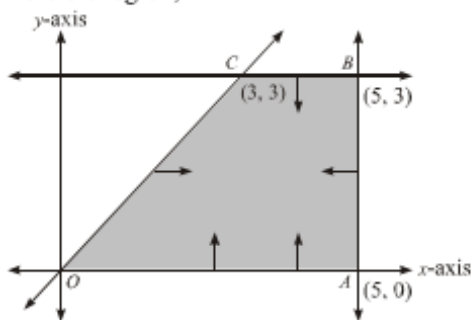
42. Which of the following quantified statement is true?

- (a) The square of every real number is positive
 (b) There exists a real number, whose square is negative
 (c) There exists a real number, whose square is not positive
 (d) Every real number is rational

43. The general solution of the equation $\tan^2 x = 1$ is

- (a) $n\pi + \frac{\pi}{4}$ (b) $n\pi - \frac{\pi}{4}$
 (c) $n\pi \pm \frac{\pi}{4}$ (d) $2n\pi \pm \frac{\pi}{4}$

44. The shaded part of given figure indicates in feasible region,



then the constraints are

- (a) $x, y \geq 0, x + y \geq 0, x \geq 5, y \leq 3$
 (b) $x, y \geq 0, x - y \geq 0, x \leq 5, y \leq 3$
 (c) $x, y \geq 0, x - y \geq 0, x \leq 5, y \geq 3$
 (d) $x, y \geq 0, x - y \leq 0, x \leq 5, y \leq 3$

45. Direction ratios of the line which is perpendicular to the lines with direction ratios $-1, 2, 2$ and $0, 2, 1$ are

- (a) 1, 1, 2 (b) 2, -1, 2
 (c) -2, 1, 2 (d) 2, 1, -2

46. If matrix $A = \begin{bmatrix} 1 & 2 \\ 4 & 3 \end{bmatrix}$, such that $AX = I$, then X is equal to

- (a) $\frac{1}{5} \begin{bmatrix} 1 & 3 \\ 2 & -1 \end{bmatrix}$ (b) $\frac{1}{5} \begin{bmatrix} 4 & 2 \\ 4 & -1 \end{bmatrix}$
 (c) $\frac{1}{5} \begin{bmatrix} -3 & 2 \\ 4 & -1 \end{bmatrix}$ (d) $\frac{1}{5} \begin{bmatrix} -1 & 2 \\ -1 & 4 \end{bmatrix}$

47. If $\vec{a} = \hat{i} - \hat{j} + \hat{k}$, $\vec{b} = 2\hat{i} + \lambda\hat{j} + \hat{k}$, $\vec{c} = \hat{i} - \hat{j} + 4\hat{k}$ and $\vec{a} \cdot (\vec{b} \times \vec{c}) = 10$, then λ is equal to

- (a) 6 (b) 7 (c) 9 (d) 10

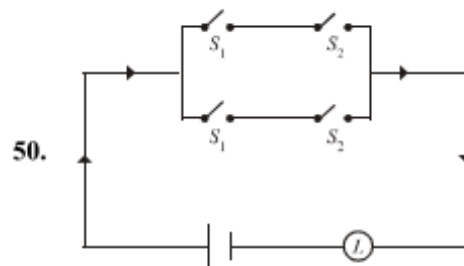
48. If random variable $x \sim B\left(n = 5, P = \frac{1}{3}\right)$, then $P(2 < X < 4)$ is equal to

- (a) $\frac{80}{243}$ (b) $\frac{40}{243}$ (c) $\frac{40}{343}$ (d) $\frac{80}{343}$

49. The objective function $Z = x_1 + x_2$, subject to the constraints are

$x_1 + x_2 \leq 10, -2x_1 + 3x_2 \leq 15, x_1 \leq 6, x_1, x_2 \geq 0$, has maximum value _____ of the feasible region.

- (a) at only one point
 (b) at only two points
 (c) at every point of the segment joining two points
 (d) at every point of the line joining two points equivalent to



Symbolic form of the given switching circuit is equivalent to:

- (a) $p \vee \sim q$ (b) $p \wedge \sim q$
 (c) $p \leftrightarrow q$ (d) None of these